

Name: _____

Addition

Represent addition with sums equal to or less than 5

Match the addition problem on the left to the equal problem on the right.

$1 + 3$



$2 + 2$



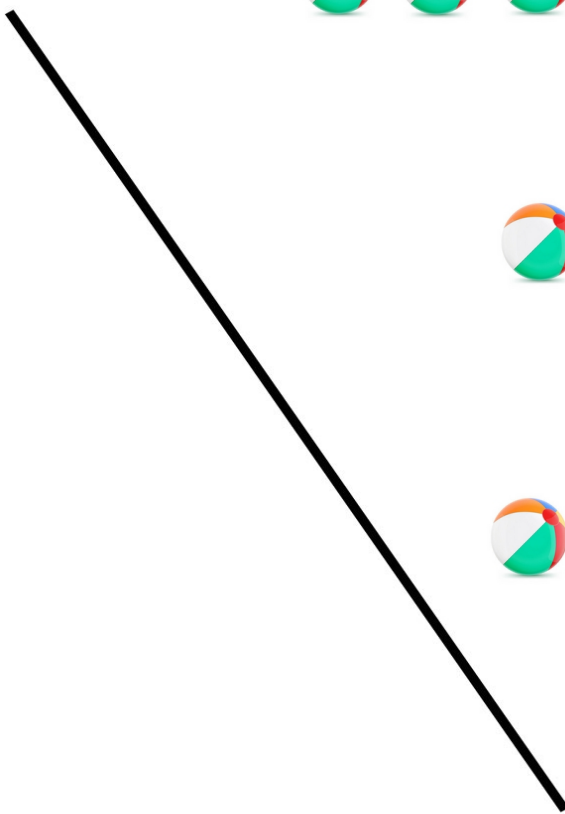
$4 + 1$



$1 + 2$



$2 + 3$



CCSS: K.OA.A.1

Name: _____

Addition

Represent addition with sums equal to or less than 5

Match the addition problem on the left to the equal problem on the right.

$1 + 1$



$1 + 2$



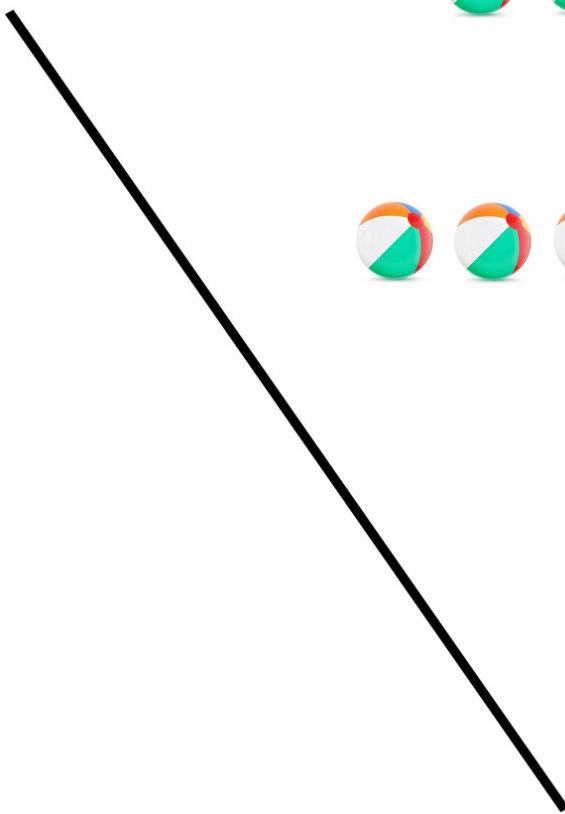
$4 + 1$



$2 + 2$



$3 + 2$



CCSS: K.OA.A.1

Name: _____

Addition

Represent addition with sums equal to or less than 10

Match the addition problem on the left to the equal problem on the right.

$3 + 4$



$1 + 3$



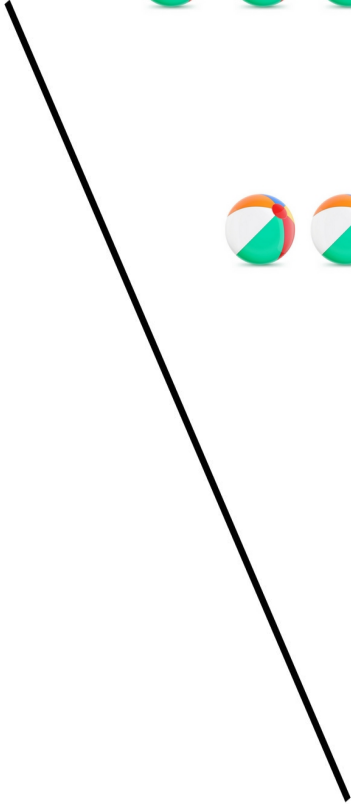
$6 + 4$



$4 + 4$



$5 + 2$



CCSS: K.OA.A.1

Name: _____

Addition

Represent addition with sums equal to or less than 10

Match the addition problem on the left to the equal problem on the right.

$3 + 3$



$4 + 1$



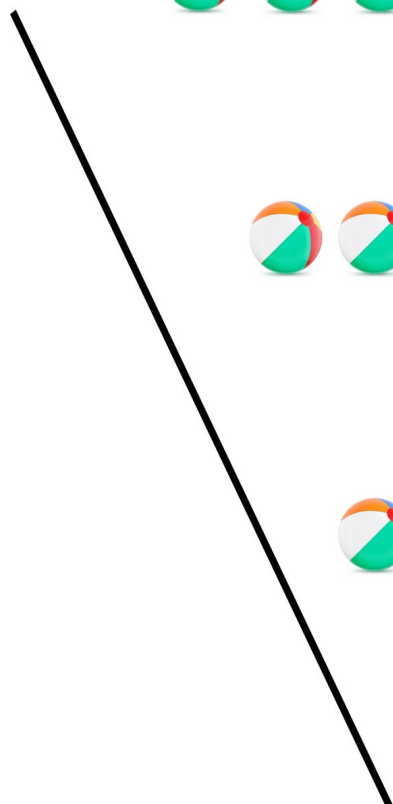
$6 + 3$



$5 + 3$



$5 + 2$



CCSS: K.OA.A.1