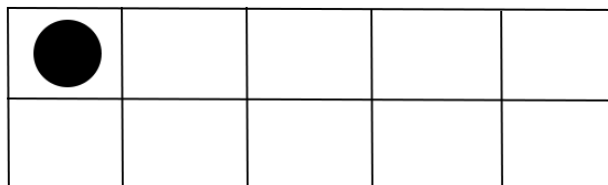


Name: \_\_\_\_\_


## ADDITION - Make 10

Complete the equation to make 10. Use the grid on the right to help count.


$1 + \square = 10$



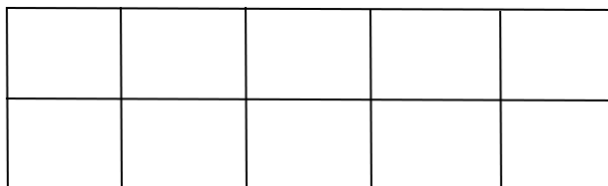
$3 + \square = 10$




$5 + \square = 10$



$6 + \square = 10$



$8 + \square = 10$



CCSS: K.OA.A.1, K.OA.A.4

Name: \_\_\_\_\_

## ADDITION - Make 10

Complete the equation to make 10. Use the grid on the right to help count.

$2 + \square = 10$


$4 + \square = 10$


$5 + \square = 10$


$7 + \square = 10$


$9 + \square = 10$


CCSS: K.OA.A.1, K.OA.A.4

Name: \_\_\_\_\_

## ADDITION - Make 10

Complete the equation to make 10. Use the grid on the right to help count.

$3 + \square = 10$


$9 + \square = 10$


$5 + \square = 10$


$2 + \square = 10$


$1 + \square = 10$


CCSS: K.OA.A.1, K.OA.A.4

Name: \_\_\_\_\_

## ADDITION - Make 10

Complete the equation to make 10. Use the grid on the right to help count.

$3 + \square = 10$


$4 + \square = 10$


$9 + \square = 10$


$7 + \square = 10$


$6 + \square = 10$


CCSS: K.OA.A.1, K.OA.A.4