

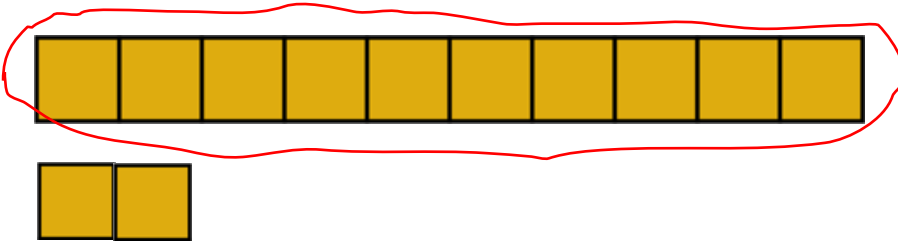
Name: \_\_\_\_\_

# Numbers and Place Value

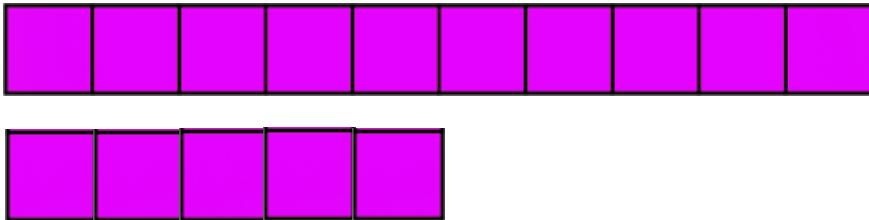
Count 10s and 1s with place value blocks (11 to 19)

Count the number of objects in each group. Circle a group of ten. Write the number of tens and ones.

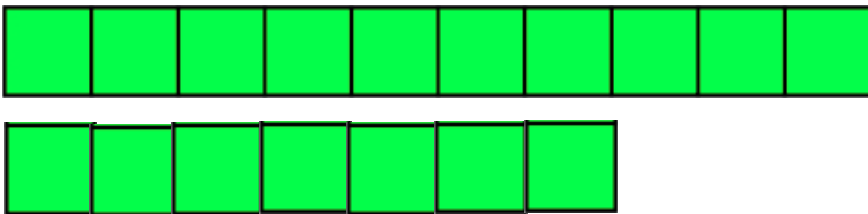
**EXAMPLE**



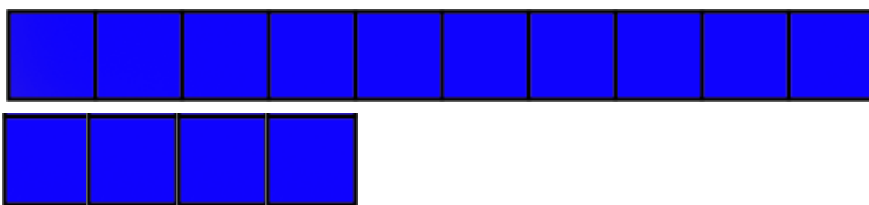
Tens	Ones
1	2



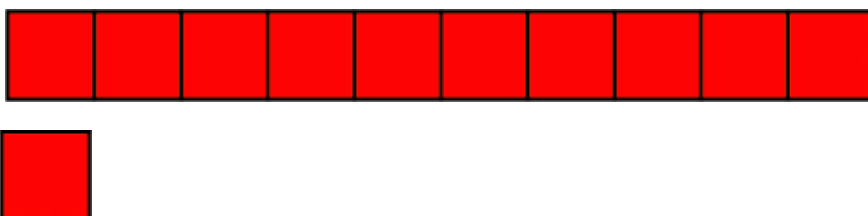
Tens	Ones



Tens	Ones



Tens	Ones



Tens	Ones

CCSS: K.CC.A.1, K.NBT.A.1

Name: \_\_\_\_\_


# Numbers and Place Value

Count 10s and 1s with place value blocks (11 to 19)


Count the number of objects in each group. Circle a group of ten. Write the number of tens and ones.



Tens	Ones



Tens	Ones



Tens	Ones



Tens	Ones



Tens	Ones

CCSS: K.CC.A.1, K.NBT.A.1

Name: \_\_\_\_\_


# Numbers and Place Value

Count 10s and 1s with place value blocks (11 to 19)


Count the number of objects in each group. Circle a group of ten. Write the number of tens and ones.



Tens	Ones



Tens	Ones



Tens	Ones



Tens	Ones



Tens	Ones

CCSS: K.CC.A.1, K.NBT.A.1

Name: \_\_\_\_\_

# Numbers and Place Value

Count 10s and 1s with place value blocks (11 to 19)


Count the number of objects in each group. Circle a group of ten. Write the number of tens and ones.



Tens	Ones



Tens	Ones



Tens	Ones



Tens	Ones



Tens	Ones

CCSS: K.CC.A.1, K.NBT.A.1

Name: \_\_\_\_\_

# Numbers and Place Value

Count 10s and 1s with place value blocks (11 to 19)


Count the number of objects in each group. Circle a group of ten. Write the number of tens and ones.



Tens	Ones




Tens	Ones



Tens	Ones



Tens	Ones



Tens	Ones

CCSS: K.CC.A.1, K.NBT.A.1

Name: \_\_\_\_\_

# Numbers and Place Value

Count 10s and 1s with place value blocks (11 to 19)

Count the number of objects in each group. Circle a group of ten. Write the number of tens and ones.



Tens	Ones



Tens	Ones



Tens	Ones



Tens	Ones



Tens	Ones

CCSS: K.CC.A.1, K.NBT.A.1