

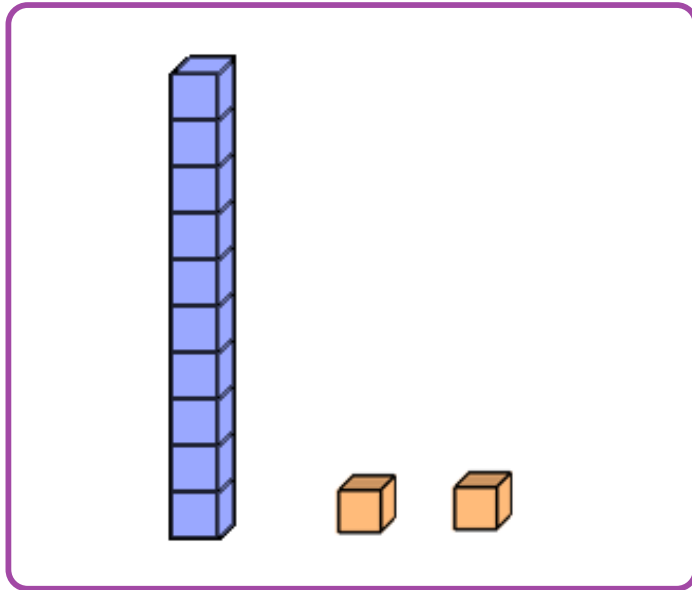
Name: _____

Numbers and Place Value

Count 10s and 1s with place-value blocks

Draw place-value blocks that represent the number shown above the box.

(example) **12**



16



14



11



Name: _____

Numbers and Place Value

Count 10s and 1s with place-value blocks

Draw place-value blocks that represent the number shown above the box.


12



15



19



13



Name: _____

Numbers and Place Value

Count 10s and 1s with place-value blocks

Draw place-value blocks that represent the number shown above the box.

11



17



15



14



Name: _____

Numbers and Place Value

Count 10s and 1s with place-value blocks

Draw place-value blocks that represent the number shown above the box.

18




12



13



16



Name: _____

Numbers and Place Value

Count 10s and 1s with place-value blocks

Draw place-value blocks that represent the number shown above the box.

17




11



19



13



Name: _____

Numbers and Place Value

Count 10s and 1s with place-value blocks

Draw place-value blocks that represent the number shown above the box.

15



18



11



14

