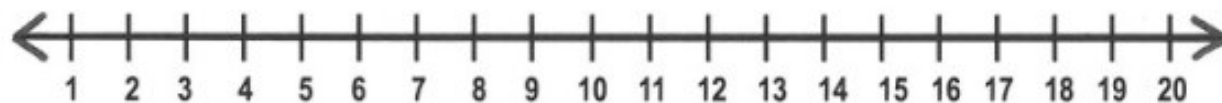


Name: _____

ADDITION

Adding to Represent Actions

Use the number line and count on to add.



1. $9 + 4 =$ _____

2. $7 + 3 =$ _____

3. $2 + 1 =$ _____

4. $8 + 5 =$ _____

5. $6 + 4 =$ _____

6. $3 + 2 =$ _____

7. $5 + 4 =$ _____

8. $7 + 5 =$ _____

9. $9 + 2 =$ _____

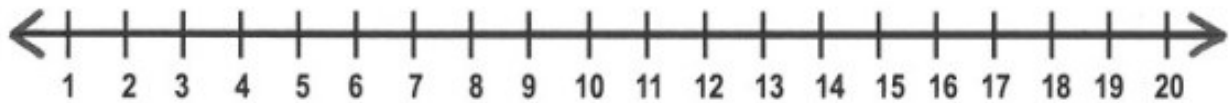
10. $8 + 3 =$ _____

Name: _____

ADDITION

Adding to Represent Actions

Use the number line and count on to add.



1. $4 + 1 =$ _____

2. $9 + 5 =$ _____

3. $8 + 2 =$ _____

4. $3 + 2 =$ _____

5. $7 + 4 =$ _____

6. $5 + 3 =$ _____

7. $2 + 1 =$ _____

8. $6 + 4 =$ _____

9. $5 + 1 =$ _____

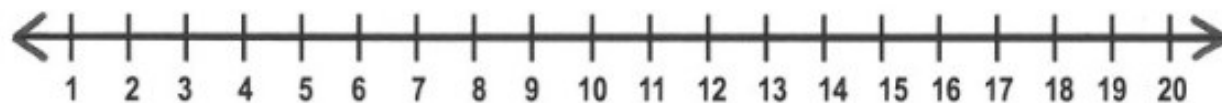
10. $4 + 3 =$ _____

Name: _____

ADDITION

Adding to Represent Actions

Use the number line and count on to add.



1. $7 + 2 =$ _____

2. $3 + 3 =$ _____

3. $4 + 1 =$ _____

4. $8 + 5 =$ _____

5. $2 + 2 =$ _____

6. $5 + 4 =$ _____

7. $9 + 3 =$ _____

8. $7 + 1 =$ _____

9. $6 + 5 =$ _____

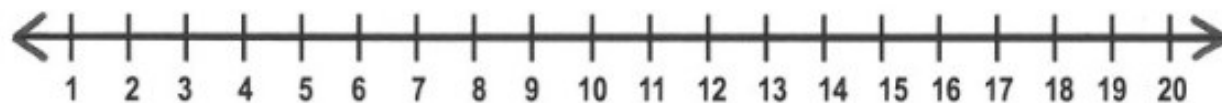
10. $2 + 1 =$ _____

Name: _____

ADDITION

Adding to Represent Actions

Use the number line and count on to add.



1. $8 + 5 =$ _____

2. $6 + 3 =$ _____

3. $1 + 1 =$ _____

4. $3 + 2 =$ _____

5. $7 + 4 =$ _____

6. $5 + 1 =$ _____

7. $9 + 5 =$ _____

8. $2 + 2 =$ _____

9. $4 + 3 =$ _____

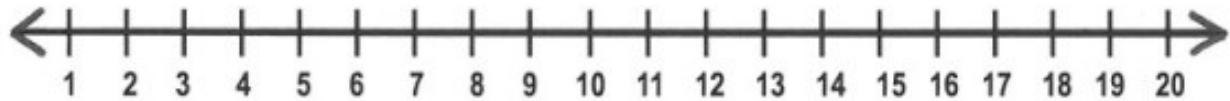
10. $6 + 5 =$ _____

Name: _____

ADDITION

Adding to Represent Actions

Use the number line and count on to add.



1. $7 + 5 =$ _____

2. $3 + 2 =$ _____

3. $6 + 4 =$ _____

4. $4 + 1 =$ _____

5. $5 + 3 =$ _____

6. $2 + 1 =$ _____

7. $7 + 2 =$ _____

8. $8 + 5 =$ _____

9. $9 + 2 =$ _____

10. $1 + 1 =$ _____