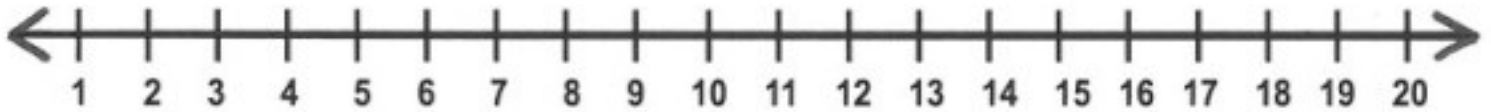


Name: _____

ADDITION

Adding on a Number Line

Use the number line to solve.



1) $12 + 8 =$ _____

6) $3 + 13 =$ _____

2) $7 + 4 =$ _____

7) $10 + 7 =$ _____

3) $6 + 9 =$ _____

8) $5 + 11 =$ _____

4) $2 + 17 =$ _____

9) $14 + 0 =$ _____

5) $1 + 4 =$ _____

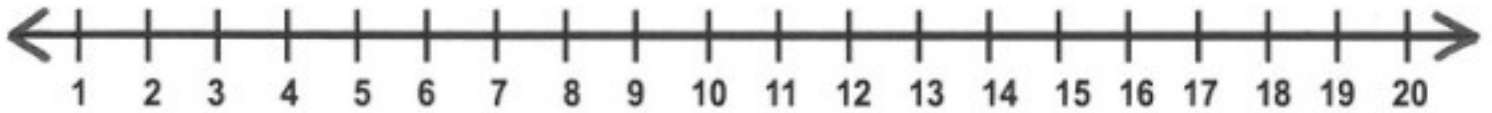
10) $9 + 1 =$ _____

Name: _____

ADDITION

Adding on a Number Line

Use the number line to solve.



1) $1 + 19 =$ _____

7) $3 + 2 =$ _____

2) $10 + 3 =$ _____

8) $17 + 0 =$ _____

3) $6 + 12 =$ _____

9) $4 + 7 =$ _____

4) $2 + 7 =$ _____

10) $9 + 5 =$ _____

5) $8 + 11 =$ _____

11) $12 + 4 =$ _____

6) $14 + 1 =$ _____

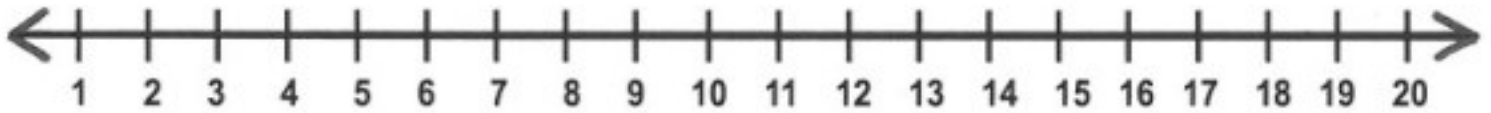
12) $2 + 15 =$ _____

Name: _____

ADDITION

Adding on a Number Line

Use the number line to solve.



1) $13 + 6 =$ _____

7) $18 + 2 =$ _____

2) $3 + 3 =$ _____

8) $1 + 9 =$ _____

3) $2 + 16 =$ _____

9) $11 + 6 =$ _____

4) $7 + 5 =$ _____

10) $4 + 10 =$ _____

5) $1 + 2 =$ _____

11) $5 + 3 =$ _____

6) $9 + 7 =$ _____

12) $6 + 7 =$ _____