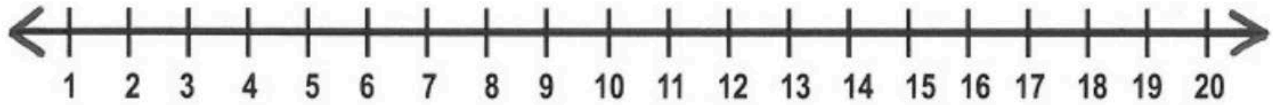


Name: _____

ADDITION

3 Addend Word Problems

Use the number line to solve each word problem.



- 1) Taylor bought 2 books. Emily bought 3 books. Maddie bought 4 books. How many books did they buy in all?

- 2) John saw 4 bugs. Ken saw 5 bugs. Jim saw 7 bugs. How many bugs did they see in all?

- 3) Pam has 3 fish, Timmy has 7 fish, and Lily has 9 fish. How many fish are there total?

- 4) Emma has 3 mango trees in her backyard, 2 peach trees, and 5 apple trees. How many trees are in Emma's backyard in all?

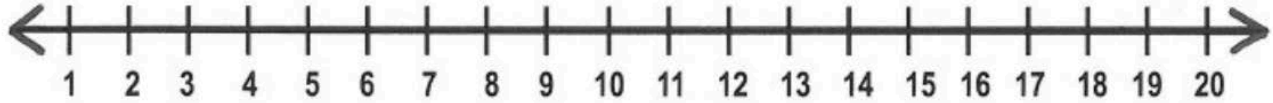
- 5) Sarah ate 2 pieces of pizza. Clara ate 2 pieces of pizza. Dylan ate 3 pieces of pizza. How many pieces did they eat in all?

Name: _____

ADDITION

3 Addend Word Problems

Solve each word problem.



- 1) Stacey saw 3 ladybugs on Monday, 7 ladybugs on Tuesday, and 4 ladybugs on Wednesday. How many ladybugs did she see in all?

- 2) Johnny and Lucy went to the dog park. They saw 5 brown dogs, 2 yellow dogs, and 4 black dogs. How many dogs did they see total?

- 3) Tina ate 10 grapes. Bob ate 5 grapes. Jan ate 3 grapes. How many grapes did they eat in all?

- 4) Lily read 1 book, Tim read 1 book, and Rachel read 4 books. How many books did they read in all?

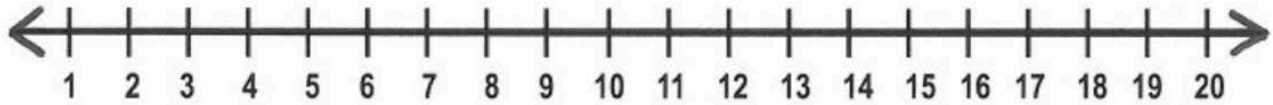
- 5) Jack saw 4 red birds, 7 blue birds, and 6 yellow birds. How many birds did he see total?

Name: _____

ADDITION

3 Addend Word Problems

Solve each word problem.



- 1) Jenna went to the mall to find a new dress. In the first store, she saw 6 dresses. In the next store, she saw 9 dresses. In the last store she saw 5 dresses. How many did she see in all?
- 2) Tony bought 3 apples, Kelly bought 2 apples, and Ben bought 4 apples. How many apples did they buy total?
- 3) Taylor and Ashley baked 6 chocolate chip cookies, 6 sugar cookies, and 6 gingerbread cookies. How many cookies did they bake in all?
- 4) Lukas watched 2 movies, Chris watched 2 movies, and Alex watched 1 movie. How many movies did they watch in all?
- 5) Jill has 5 blue marbles, 4 green marbles, and 4 purple marbles. How many marbles does she have in all?