


Name: _____

EVENS AND ODDS


Identifying Even and Odd Numbers < 20

Count by 2s to see if the given number is odd or even, then circle your answer.

1) Is 12 ODD or EVEN?




2) Is 9 ODD or EVEN?




3) Is 3 ODD or EVEN?




4) Is 18 ODD or EVEN?




5) Is 17 ODD or EVEN?




6) Is 5 ODD or EVEN?



7) Is 10 ODD or EVEN?



8) Is 8 ODD or EVEN?



CCSS: 2.OA.C.3


Name: _____

EVENS AND ODDS


Identifying Even and Odd Numbers < 20

Count by 2s to see if the given number is odd or even, then circle your answer.

1) Is 14 ODD or EVEN?




2) Is 13 ODD or EVEN?




3) Is 2 ODD or EVEN?




4) Is 16 ODD or EVEN?




5) Is 19 ODD or EVEN?




6) Is 4 ODD or EVEN?



7) Is 7 ODD or EVEN?



8) Is 11 ODD or EVEN?



CCSS: 2.OA.C.3