


Name: _____

EVENS AND ODDS

Foundations of Multiplication

Write an addition equation with equal addends to find the total number of objects.

EX:  $2 + 2 + 2 + 2 = 8$



_____ = _____



_____ = _____



_____ = _____



_____ = _____


CCSS: 2.OA.C.4

Name: _____

EVENS AND ODDS

Foundations of Multiplication

Write an addition equation with equal addends to find the total number of objects.

EX:  $2 + 2 + 2 = 6$



_____ = _____



_____ = _____



_____ = _____



_____ = _____

CCSS: 2.OA.C.4


Name: _____

EVENS AND ODDS

Foundations of Multiplication

Write an addition equation with equal addends to find the total number of objects.

EX:




$$2 + 2 + 2 = 6$$



$$\underline{\hspace{2cm}} = \underline{\hspace{2cm}}$$



$$\underline{\hspace{2cm}} = \underline{\hspace{2cm}}$$



$$\underline{\hspace{2cm}} = \underline{\hspace{2cm}}$$



$$\underline{\hspace{2cm}} = \underline{\hspace{2cm}}$$

CCSS: 2.OA.C.4