



Name: \_\_\_\_\_

# GEOMETRY

Identify Shapes Based on Number of Sides



Look at each shape and answer the questions.

Circle the shapes that have FOUR sides.






---

Circle the shapes that have THREE sides.



---

Circle the shapes that have SEVEN sides.





Name: \_\_\_\_\_

# GEOMETRY


Identify Shapes Based on Number of Sides

Look at each shape and answer the questions.




Circle the shapes that have FIVE sides.



Circle the shapes that have FOUR sides.



Circle the shapes that have THREE sides.



Name: \_\_\_\_\_

# GEOMETRY

## Identify Shapes Based on Number of Sides

Read each question and write the name of the correct shape in the blank.

1) What shape has four sides? \_\_\_\_\_



2) What shape has three sides? \_\_\_\_\_

3) What shape has no sides? \_\_\_\_\_

4) What shape has five sides? \_\_\_\_\_

5) What shape has six sides? \_\_\_\_\_

Circle the shapes that have SEVEN sides.



Circle the shapes that have THREE sides.

