


Name: _____

GEOMETRY

Identifying Shapes

Determine what each given shape is and circle your answer.




- a. circle
- b. triangle
- c. square




- a. square
- b. circle
- c. triangle



- a. quadrilateral
- b. triangle
- c. circle



- a. circle
- b. pentagon
- c. triangle



- a. quadrilateral
- b. pentagon
- c. hexagon




- a. hexagon
- b. circle
- c. triangle

Name: _____

GEOMETRY

Identifying Shapes


Determine what each given shape is and circle your answer.




- a. circle
- b. pentagon
- c. square



- a. triangle
- b. circle
- c. quadrilateral



- a. quadrilateral
- b. triangle
- c. circle



- a. heptagon
- b. circle
- c. triangle



- a. quadrilateral
- b. pentagon
- c. triangle



- a. square
- b. circle
- c. quadrilateral

Name: _____


GEOMETRY

Identifying Shapes


Determine what each given shape is and circle your answer.




- a. circle
- b. triangle
- c. square




- a. square
- b. circle
- c. triangle




- a. quadrilateral
- b. triangle
- c. circle



- a. circle
- b. pentagon
- c. triangle



- a. quadrilateral
- b. pentagon
- c. hexagon



- a. hexagon
- b. circle
- c. triangle