


Name: _____

GEOMETRY

Count the Number of Parts

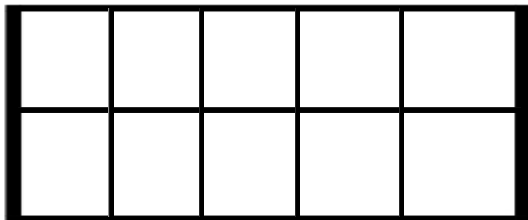
Count the columns and rows of each rectangle. Then decide how many parts make up each rectangle. Write your answers in the blanks.



_____ Rows

_____ Columns

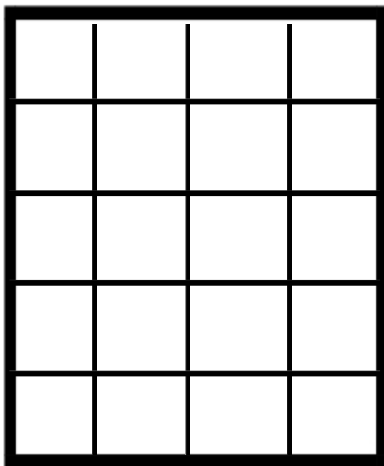
_____ Parts total



_____ Rows

_____ Columns

_____ Parts total



_____ Rows

_____ Columns

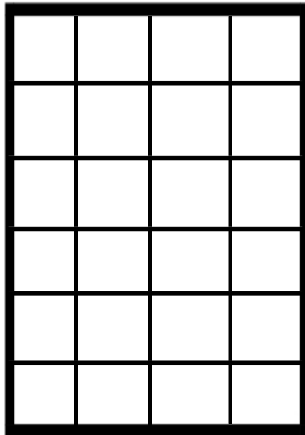
_____ Parts total

Name: _____

GEOMETRY

Count the Number of Parts


Count the columns and rows of each rectangle. Then decide how many parts make up each rectangle. Write your answers in the blanks.



_____ Rows

_____ Columns

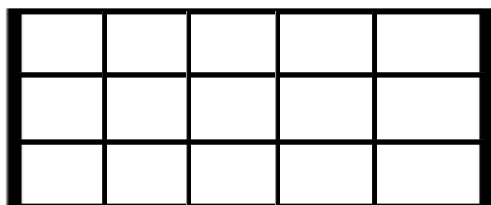
_____ Parts total



_____ Rows

_____ Columns

_____ Parts total



_____ Rows

_____ Columns

_____ Parts total