


Name: _____

GEOMETRY


Divide a Circle into Equal Parts

Follow the instructions for each problem below.


Draw a line to divide this circle into 4 equal parts.




Draw a line to divide this circle into 2 equal parts.



Draw a line to divide this circle into 3 equal parts.



Draw a line to divide this circle into 4 equal parts.



CCSS: 2.G.A.3


Name: _____

GEOMETRY


Divide a Circle into Equal Parts

Follow the instructions for each problem below.


Draw a line to divide this circle into 3 equal parts.




Draw a line to divide this circle into 4 equal parts.



Draw a line to divide this circle into 2 equal parts.



Draw a line to divide this circle into 3 equal parts.



CCSS: 2.G.A.3