


Name: _____

GEOMETRY

Describe Equal Parts of Circles and Rectangles


Look at each shape and determine the number of equal parts that make up the shape. Circle your answer.



- a. Three thirds
- b. Two halves
- c. Four fourths



- a. Three thirds
- b. Two halves
- c. Four fourths



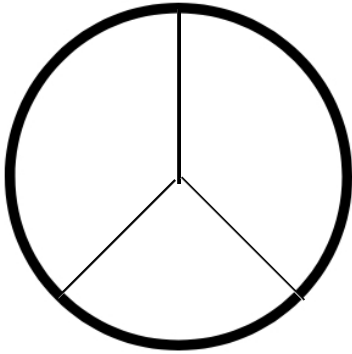
- a. Three thirds
- b. Two halves
- c. Four fourths

Name: _____

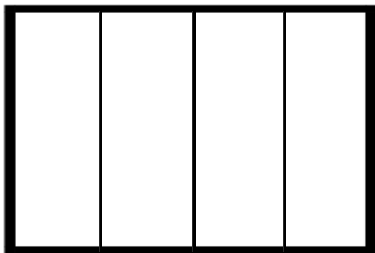
GEOMETRY

Describe Equal Parts of Circles and Rectangles

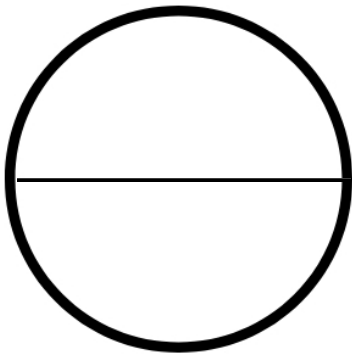
Look at each shape and determine the number of equal parts that make up the shape. Circle your answer.



- a. Three thirds
 - b. Two halves
 - c. Four fourths
-



- a. Three thirds
 - b. Two halves
 - c. Four fourths
-



- a. Three thirds
- b. Two halves
- c. Four fourths