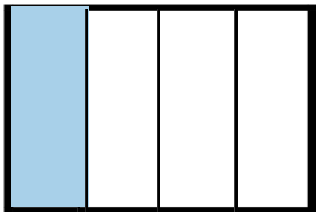


Name: \_\_\_\_\_


# GEOMETRY

## Describe Parts of Circles and Rectangles

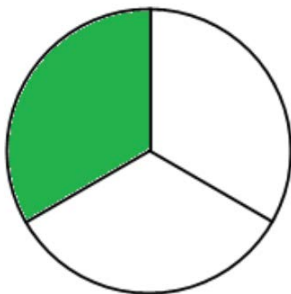
Describe the shaded part of each shape. Write your answer in the blank.



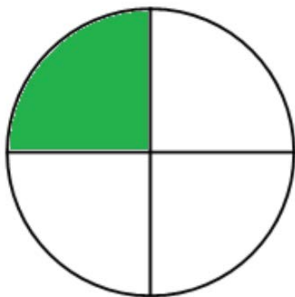
1) \_\_\_\_\_



2) \_\_\_\_\_



3) \_\_\_\_\_



4) \_\_\_\_\_