




Name: \_\_\_\_\_

# SUBTRACTION



Difference Less Than or Equal to 10


Subtract the objects on each line below and write your answer in the blank.

 $-$  $=$

 $-$  $=$

 $-$  $=$

 $-$  $=$

 $-$  $=$

CCSS: 1.OA.C.6

Name: \_\_\_\_\_

# ADDITION

Adding Numbers 0 - 10 with Sum < 20

Use any method to add the numbers and write your answer in the blank.

1)  $9 + 9 =$  \_\_\_\_\_

2)  $6 + 7 =$  \_\_\_\_\_

3)  $2 + 3 =$  \_\_\_\_\_

4)  $0 + 0 =$  \_\_\_\_\_

5)  $10 + 7 =$  \_\_\_\_\_

6)  $1 + 2 =$  \_\_\_\_\_

7)  $5 + 6 =$  \_\_\_\_\_

8)  $8 + 7 =$  \_\_\_\_\_

9)  $3 + 9 =$  \_\_\_\_\_

10)  $4 + 10 =$  \_\_\_\_\_

11)  $3 + 6 =$  \_\_\_\_\_

12)  $8 + 10 =$  \_\_\_\_\_

13)  $7 + 4 =$  \_\_\_\_\_

14)  $8 + 8 =$  \_\_\_\_\_

15)  $9 + 2 =$  \_\_\_\_\_

Name: \_\_\_\_\_

# ADDITION

## Missing Addend Word Problems

Read the word problems. Solve the equations and write your answers below.

- 1) There were 15 balloons at the birthday party. 7 balloons were blue. The rest were green. How many green balloons were at the party?
  
- 2) Jenny brought 20 cupcakes for the party. 10 of them had sprinkles on them and the rest did not. How many cupcakes did not have sprinkles?
  
- 3) There are 8 penguins at the zoo. 5 of them were swimming and the rest were not. How many penguins were not swimming?
  
- 4) Jon has 5 pets. 3 of them are dogs and the rest are cats. How many cats does Jon have?

Name: \_\_\_\_\_

# SUBTRACTION

## Word Problems With Missing Numbers

Solve each word problem.

1. Lily saw 5 birds on a branch, then 2 flew away. How many birds are left?

$$5 - 2 = \square$$

2. Mark had 9 pieces of candy, then gave some to Luke. Mark has 4 pieces of candy left. How many did he give to Luke?

$$9 - \square = 4$$

3. Carly baked 15 cookies and decorated some of them. She left 7 of them plain. How many did she decorate?

$$15 - \square = 7$$

4. Jimmy has 12 jelly beans. He gave 3 to Jenna. How many jelly beans does he have left?

$$12 - 3 = \square$$

5. Kim saw 8 dogs at the park, then some went home. There are 6 dogs left at the park. How many went home?

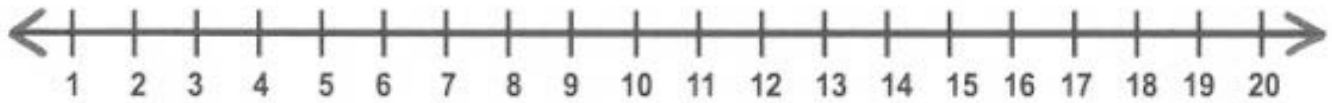
$$8 - \square = 6$$

Name: \_\_\_\_\_

# SUBTRACTION

Subtracting on a Number Line

Use the number line to solve.



1)  $7 - 7 =$  \_\_\_\_\_

7)  $13 - 5 =$  \_\_\_\_\_

2)  $20 - 11 =$  \_\_\_\_\_

8)  $10 - 8 =$  \_\_\_\_\_

3)  $18 - 15 =$  \_\_\_\_\_

9)  $16 - 7 =$  \_\_\_\_\_

4)  $11 - 4 =$  \_\_\_\_\_

10)  $19 - 12 =$  \_\_\_\_\_

5)  $9 - 1 =$  \_\_\_\_\_

11)  $14 - 9 =$  \_\_\_\_\_

6)  $17 - 10 =$  \_\_\_\_\_

12)  $15 - 14 =$  \_\_\_\_\_

CCSS: 1.OA.C.6

Name: \_\_\_\_\_

# SUBTRACTION

## Subtracting 0 - 10 with Missing Numbers

Write the missing number in the blank.

1)  $8 - \underline{\quad} = 4$

11)  $\underline{\quad} - 4 = 6$

2)  $\underline{\quad} - 1 = 5$

12)  $7 - \underline{\quad} = 4$

3)  $3 - \underline{\quad} = 1$

13)  $\underline{\quad} - 1 = 9$

4)  $10 - \underline{\quad} = 3$

14)  $9 - \underline{\quad} = 7$

5)  $\underline{\quad} - 6 = 3$

15)  $\underline{\quad} - 5 = 5$

6)  $5 - \underline{\quad} = 1$

16)  $\underline{\quad} - 3 = 3$

7)  $\underline{\quad} - 3 = 4$

17)  $4 - \underline{\quad} = 2$

8)  $0 - \underline{\quad} = 0$

18)  $8 - \underline{\quad} = 5$

9)  $\underline{\quad} - 5 = 3$

19)  $\underline{\quad} - 0 = 10$

10)  $\underline{\quad} - 1 = 0$


20)  $5 - \underline{\quad} = 4$

Name: \_\_\_\_\_

# SUBTRACTION

Subtract to Represent Actions

Use the number line to count back and solve each problem.



1.  $4 - 2 =$  \_\_\_\_\_

2.  $7 - 4 =$  \_\_\_\_\_

3.  $10 - 1 =$  \_\_\_\_\_

4.  $8 - 3 =$  \_\_\_\_\_

5.  $12 - 2 =$  \_\_\_\_\_

6.  $17 - 9 =$  \_\_\_\_\_

7.  $11 - 4 =$  \_\_\_\_\_

8.  $5 - 3 =$  \_\_\_\_\_

9.  $14 - 8 =$  \_\_\_\_\_

10.  $9 - 5 =$  \_\_\_\_\_

Name: \_\_\_\_\_

# SUBTRACTION

## Word Problems

Solve each word problem.

- 1) There were 20 books on the bookshelf. James took 10 of the books home and Mary took the rest. How many books did Mary take home?
  
- 2) There were 15 puzzle pieces for Jon and Amy. Amy took 7 and Jon took the rest. How many puzzle pieces did Jon take?
  
- 3) The art teacher had 17 paint brushes. The first grade class took 9 paint brushes. The second grade class took the rest. How many paint brushes did the second grade class take?
  
- 4) There were 16 balloons at the store. Tina bought 10 balloons and Lucy bought the rest. How many balloons did Lucy buy?
  
- 5) There were 6 pencils on the teacher's desk. The teacher gave 6 to Lee and the rest to Anne. How many pencils did Anne get?
  
- 6) Max bought 16 marbles for his brother and sister. He gave 10 to his sister and the rest to his brother. How many marbles did his brother get?

CCSS: 1.OA.A.1



Name: \_\_\_\_\_

# SUBTRACTION

## Word Problems

Solve each word problem.

- 1) Mary's mom baked 20 cookies. She gave 10 cookies to Mary for her class party. How many cookies does Mary's mom have left?
  
- 2) Joe had 8 pieces of gum. He gave 4 pieces to his friends. How many pieces of gum does Joe have left?
  
- 3) Mark and Rachel saw 9 lightning bugs outside. Then, 2 of them flew away. How many lightning bugs are left?
  
- 4) The gym teacher had 5 jump ropes. She gave 4 of them away. How many jump ropes are left?
  
- 5) Emily drew 7 pictures. She gave 1 of the pictures to her grandma. How many pictures are left?
  
- 6) There were 10 birds in a tree. Then, 8 of the birds flew away. How many birds are left?