


Telling Time With Clocky the Caterpillar


Name: _____

Here's Clocky the Caterpillar with lots of clocks for you to read! Look at each of Clocky's clocks. Write the time for each clock in the space below.

X


EXAMPLE

x **4:10**



A _____

B _____

C _____

D _____

E _____

F _____

G _____

H _____


I _____

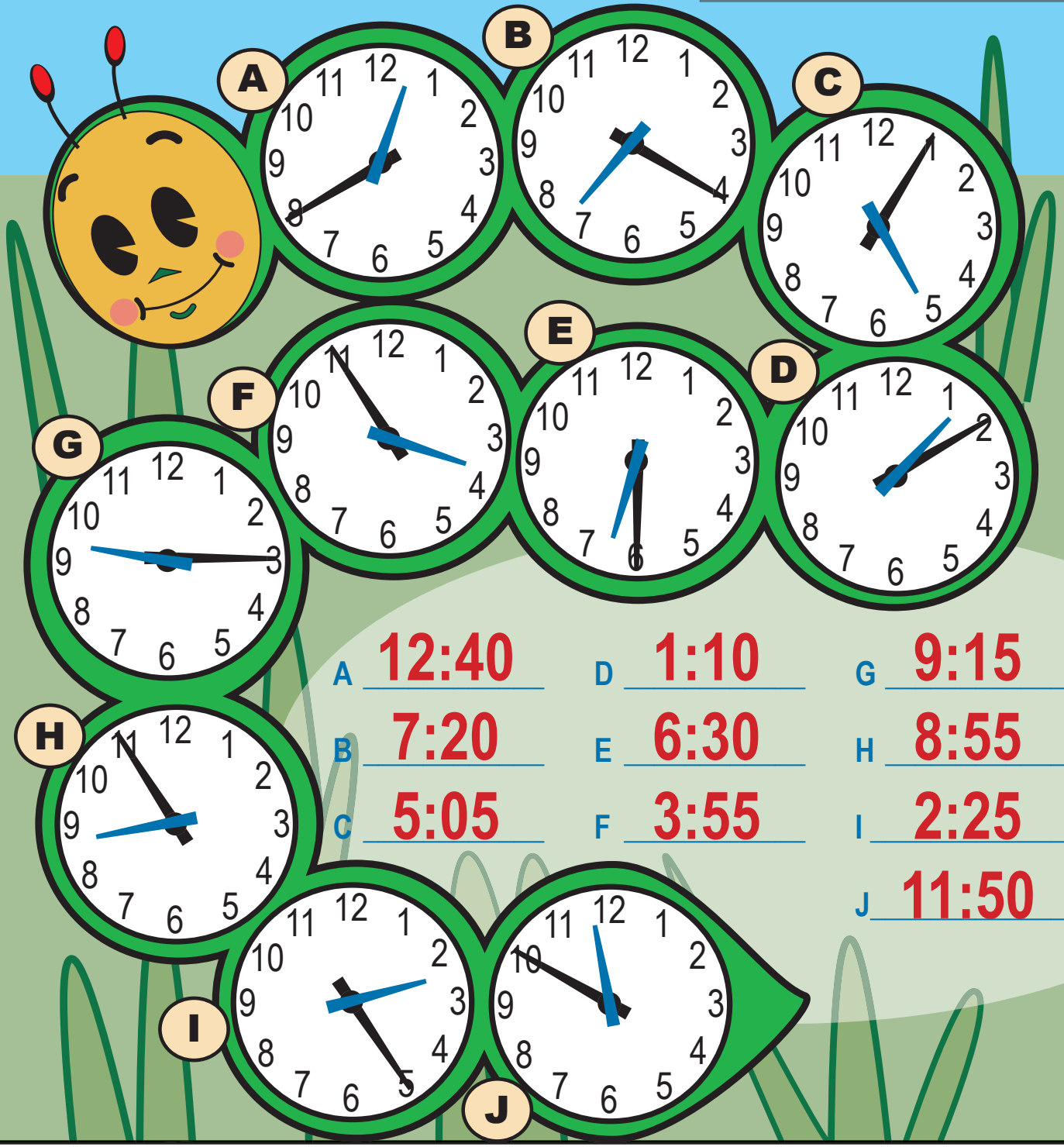
J _____




Telling Time With Clocky the Caterpillar




Name: _____




Here's Clocky the Caterpillar with lots of clocks for you to read! Look at each of Clocky's clocks. Write the time for each clock in the space below.


X  **EXAMPLE**
 x 4:10



A  **B**  **C** 

D  **E**  **F** 

G  **H**  **I** 

J 

- | | | |
|-----------------------|----------------------|-----------------------|
| A <u>12:40</u> | D <u>1:10</u> | G <u>9:15</u> |
| B <u>7:20</u> | E <u>6:30</u> | H <u>8:55</u> |
| C <u>5:05</u> | F <u>3:55</u> | I <u>2:25</u> |
| | | J <u>11:50</u> |