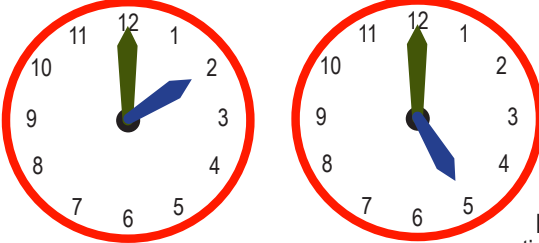


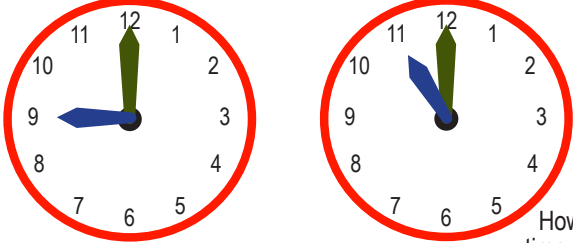
Name: _____

Clock Faces and Passing Time

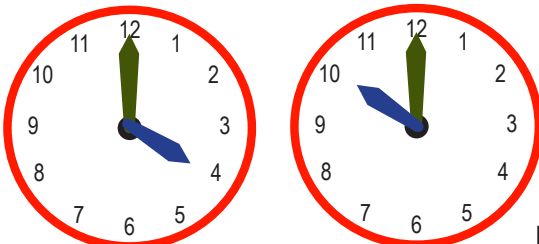
Write the time for each pair of clocks. Then find the amount of time that has passed between the two times.

1.  How much time passed?

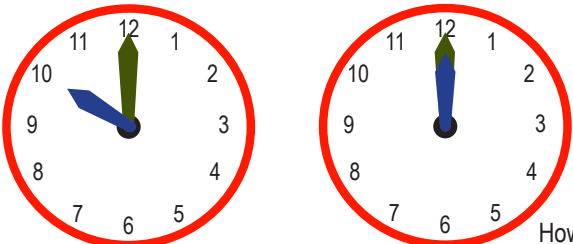
_____ a.m. _____ a.m. _____

2.  How much time passed?

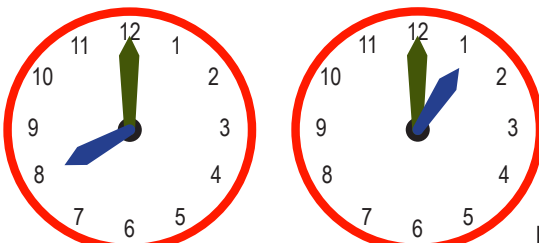
_____ a.m. _____ a.m. _____

3.  How much time passed?

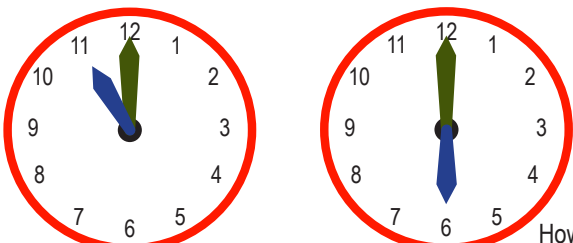
_____ p.m. _____ p.m. _____

4.  How much time passed?

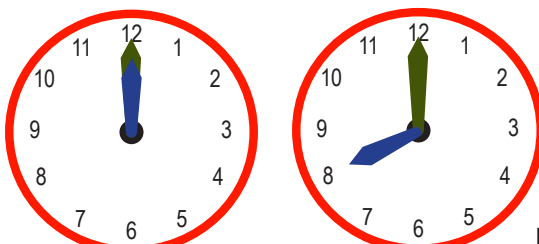
_____ a.m. _____ noon _____

5.  How much time passed?

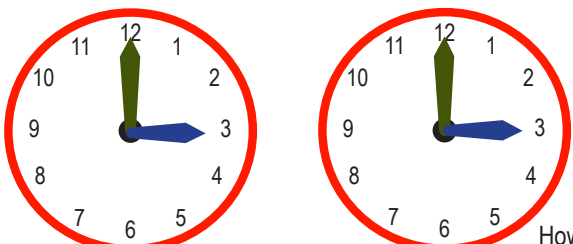
_____ a.m. _____ p.m. _____

6.  How much time passed?

_____ p.m. _____ a.m. _____

7.  How much time passed?

_____ noon _____ p.m. _____

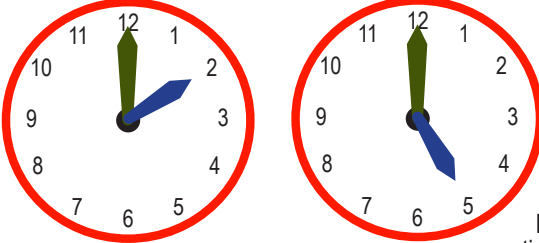
8.  How much time passed?

_____ p.m. _____ a.m. _____

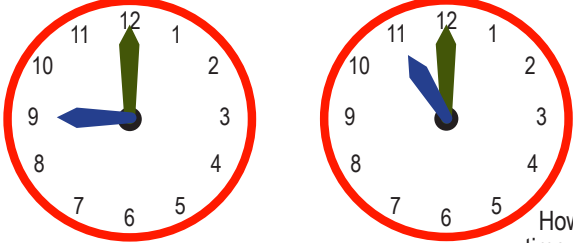
Name: _____

Clock Faces and Passing Time

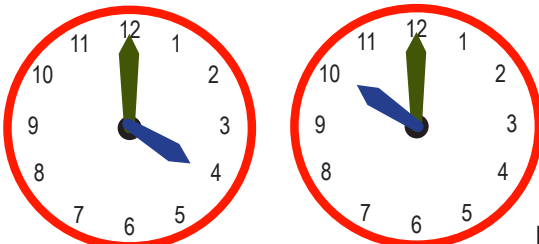
Write the time for each pair of clocks. Then find the amount of time that has passed between the two times.

1.  How much time passed?

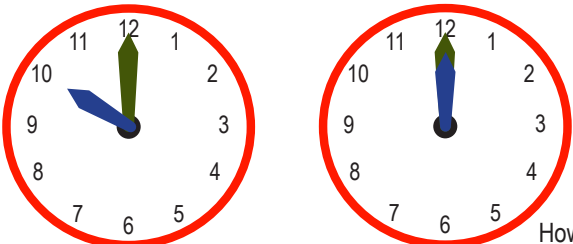
2:00 a.m. 5:00 a.m. 3 hours

2.  How much time passed?

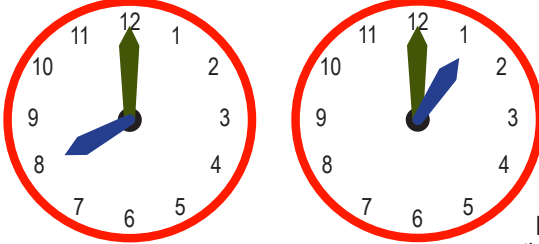
9:00 a.m. 11:00 a.m. 2 hours

3.  How much time passed?

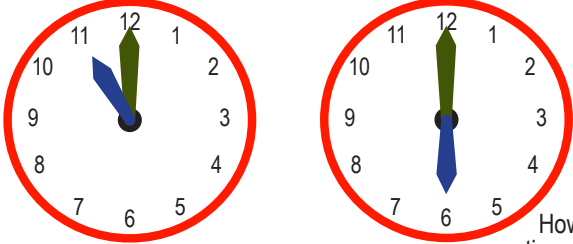
4:00 p.m. 10:00 p.m. 6 hours

4.  How much time passed?

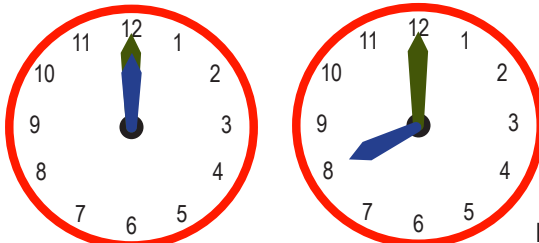
10:00 a.m. 12:00 noon 2 hours

5.  How much time passed?

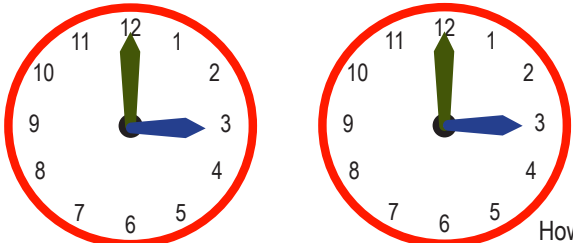
8:00 a.m. 1:00 p.m. 5 hours

6.  How much time passed?

11:00 p.m. 6:00 a.m. 7 hours

7.  How much time passed?

12:00 noon 8:00 p.m. 8 hours

8.  How much time passed?

3:00 p.m. 3:00 a.m. 12 hours