



Elapsed Time

Name: _____



Find the Time

Write the amount of time that has passed for each set of times below.

Example: 9:00 p.m. 11:00 p.m. 2 hours

1. 6:00 a.m. 10:00 a.m. _____

2. 2:00 p.m. 5:00 p.m. _____

3. 12:00 noon 1:00 p.m. _____

4. 4:00 p.m. 7:00 p.m. _____

5. 10:00 p.m. 2:00 a.m. _____

6. 11:00 a.m. 4:00 p.m. _____

7. 8:00 a.m. 3:00 p.m. _____


8. 3:00 p.m. 6:30 p.m. _____

9. 9:00 a.m. 1:30 p.m. _____

10. 5:30 p.m. 10:30 p.m. _____

Elapsed Time

Name: _____



Find the Time

Write the amount of time that has passed for each set of times below.

Example: 9:00 p.m. 11:00 p.m. 2 hours

1. 6:00 a.m. 10:00 a.m. 4 hours

2. 2:00 p.m. 5:00 p.m. 3 hours

3. 12:00 noon 1:00 p.m. 1 hour

4. 4:00 p.m. 7:00 p.m. 3 hours

5. 10:00 p.m. 2:00 a.m. 4 hours

6. 11:00 a.m. 4:00 p.m. 5 hours

7. 8:00 a.m. 3:00 p.m. 7 hours

8. 3:00 p.m. 6:30 p.m. 3 hours 30 minutes

9. 9:00 a.m. 1:30 p.m. 4 hours 30 minutes

10. 5:30 p.m. 10:30 p.m. 5 hours