

Name: _____

Passing Time - Quarter Hours

Write the time for each pair of clocks. Then find the amount of time that has passed between the two times.

1. How much time passed?

_____ p.m. _____ p.m. _____

2. How much time passed?

_____ a.m. _____ p.m. _____

3. How much time passed?

_____ a.m. _____ a.m. _____

4. How much time passed?

_____ p.m. _____ p.m. _____

5. How much time passed?

_____ a.m. _____ a.m. _____

6. How much time passed?

_____ p.m. _____ p.m. _____

7. How much time passed?

_____ a.m. _____ p.m. _____

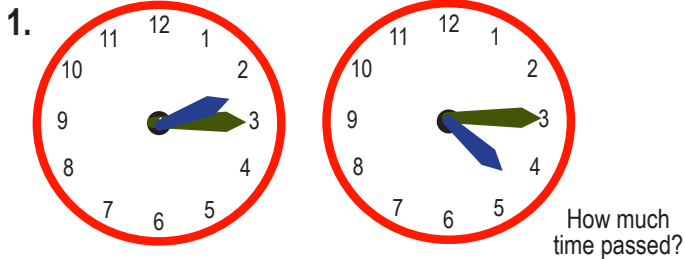
8. How much time passed?

_____ p.m. _____ a.m. _____

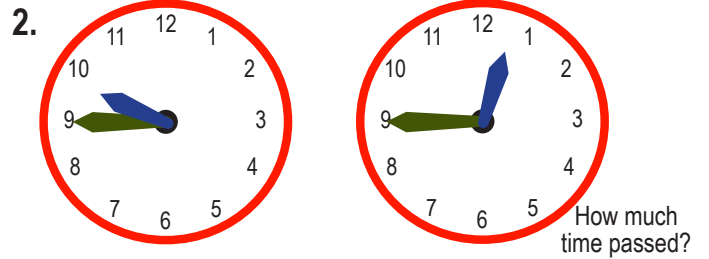
Name: _____

Passing Time - Quarter Hours

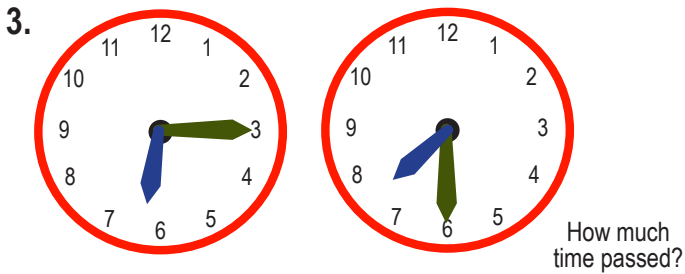
Write the time for each pair of clocks. Then find the amount of time that has passed between the two times.



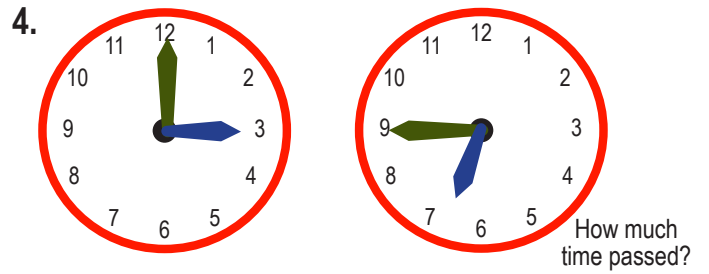
2:15 p.m. **4:15** p.m. **2 hours**



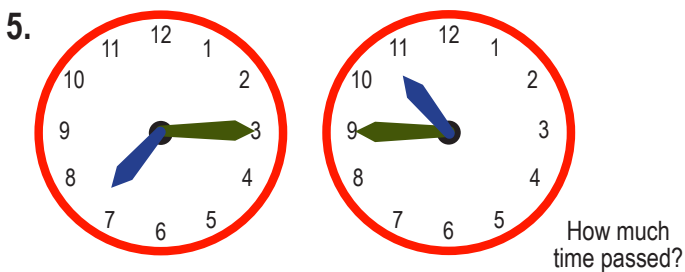
9:45 a.m. **12:45** p.m. **3 hours**



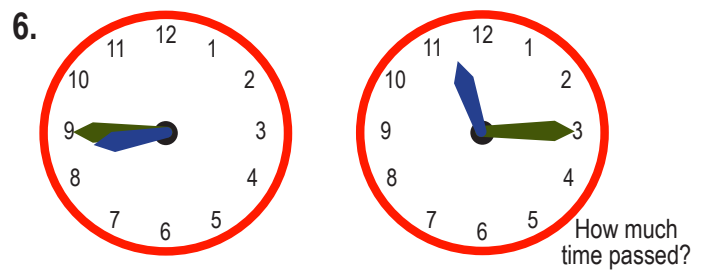
6:15 a.m. **7:30** a.m. **1 hour 15 min**



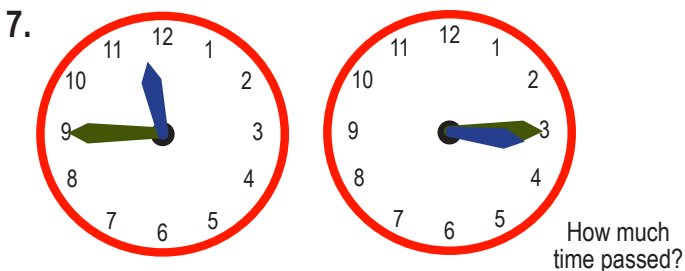
3:00 p.m. **6:45** p.m. **3 hrs 45 min**



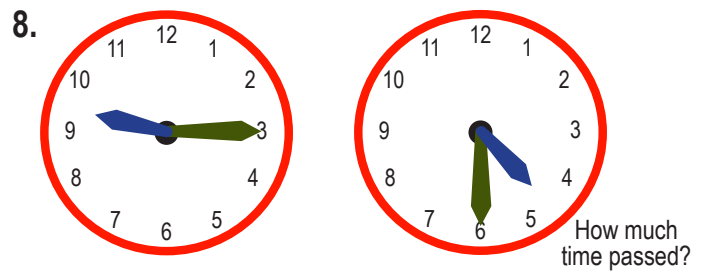
7:15 a.m. **10:45** a.m. **3 hrs 30 min**



8:45 p.m. **11:15** p.m. **2 hrs 30 min**



11:45 a.m. **3:15** p.m. **3 hrs 30 min**



9:15 p.m. **4:30** a.m. **7 hrs 15 min**